


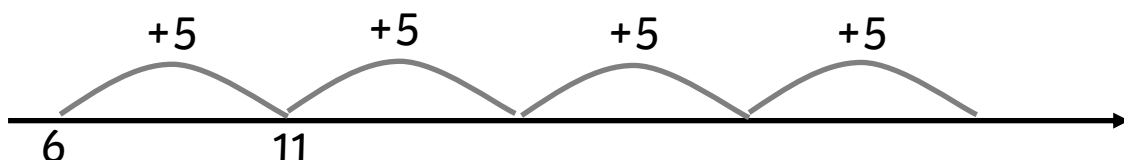
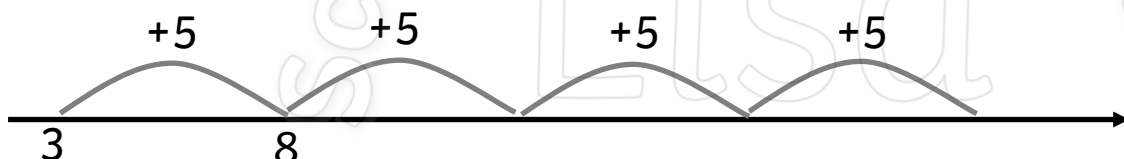
Our Senses

We have 5 senses, so try some maths with 5s


Add 5	
$1 + 5 =$	_____
$3 + 5 =$	_____
$5 + 5 =$	_____
$10 + 5 =$	_____
$12 + 5 =$	_____
$15 + 5 =$	_____



Do you know your 5x table?	
$1 \times 5 =$	$4 \times 5 =$
$2 \times 5 =$	$1 \times 5 =$
$3 \times 5 =$	$9 \times 5 =$
$4 \times 5 =$	$3 \times 5 =$
$5 \times 5 =$	$8 \times 5 =$
$6 \times 5 =$	$6 \times 5 =$
$7 \times 5 =$	$10 \times 5 =$
$8 \times 5 =$	$2 \times 5 =$
$9 \times 5 =$	$5 \times 5 =$
$10 \times 5 =$	$7 \times 5 =$



How many sets of 5 on these dominoes?



How many dots altogether?